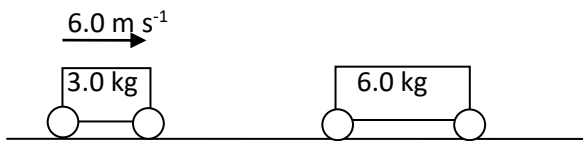


Specimen Paper 2 SL

Q1 [4 marks]

A cart of mass 3.0 kg moving at 6.0 m s^{-1} collides with a stationary cart of mass 6.0 kg.



- (a) Explain why the total momentum of the two carts before and after the collision is the same. [2]
- (b) The two carts stick together as a result of the collision. Determine the kinetic energy lost in the collision. [2]

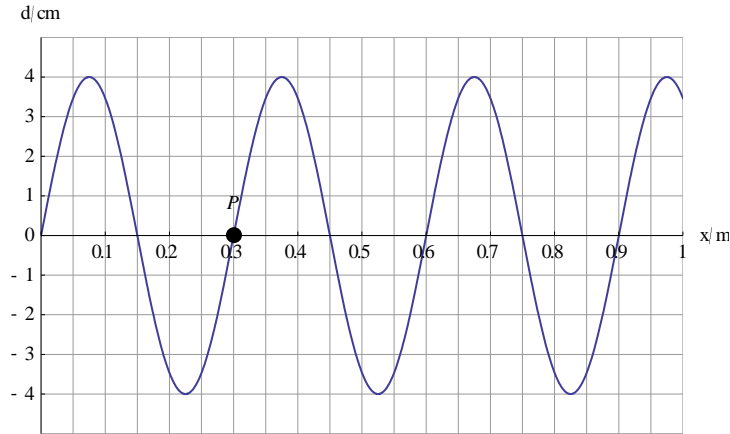
Q2 [6 marks]

- (a) Discuss how the Rutherford-Geiger-Marsden scattering experiment led to the conclusion of the existence of an atomic nucleus. [2]
- (b) A plutonium (${}^{239}_{94}\text{Pu}$) nucleus decays by alpha decay into a nucleus of uranium (U). [2]
- (i) State the reaction equation for this decay. [2]
- (ii) The following binding energies per nucleon are available:
- | | |
|-----------|------------|
| Plutonium | 7.5603 MeV |
| Uranium | 7.5909 MeV |
| Helium | 7.0739 MeV |

Estimate the energy released. [2]

Q3 [8 marks]

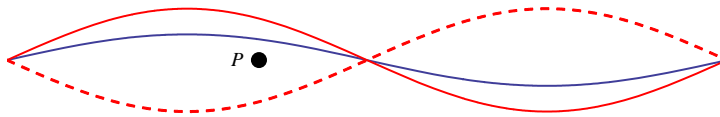
- (a) Distinguish between a transverse and a longitudinal wave. [2]
- (b) The graph shows, at $t = 0$, the variation with distance of the displacement of particles in a medium in which a transverse wave of frequency 250 Hz is travelling to the right.



A particle P in the medium has been marked.

- (i) Calculate the speed of the wave. [2]
 (ii) Draw a graph to show the variation with time t of the displacement of P. [2]

- (c) A standing wave is formed on a string with both ends fixed. The solid line represents the wave at $t = 0$ and the dashed line at $t = T/2$ where T is the period. The blue line represents the wave at $t = \frac{T}{8}$.



The marked point shows the **equilibrium** position of a point P on the string.

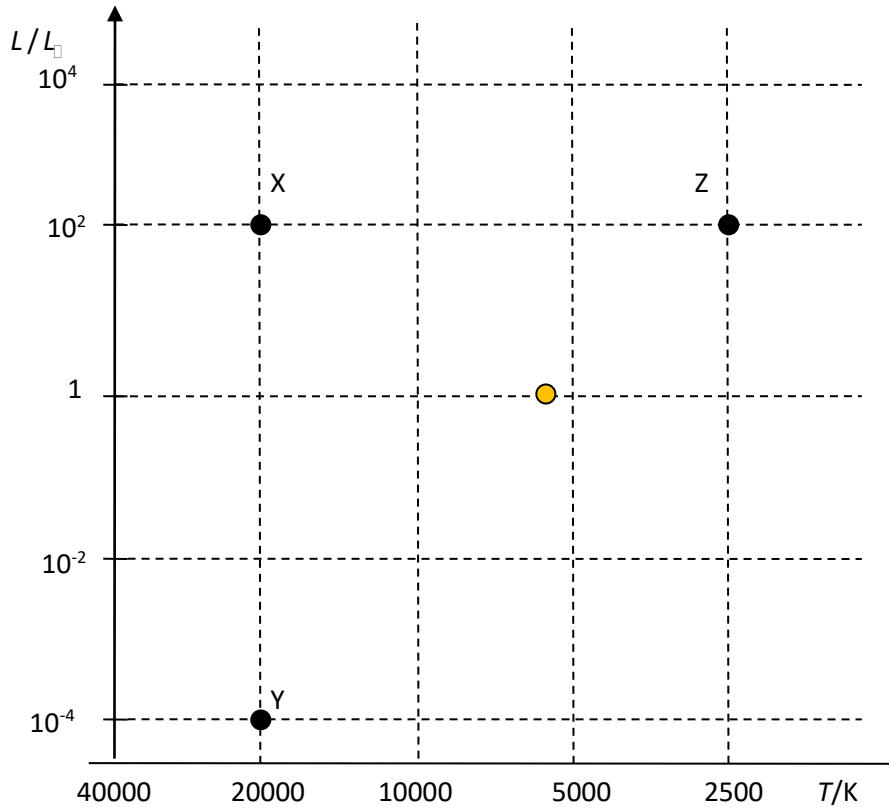
At $t = \frac{T}{8}$ draw

- (i) a point to indicate the position of P. [1]
 (ii) an arrow to indicate the velocity of P. [1]

K.A. Tsokos

Q4 [7 marks]

The HR diagram shows the Sun and three other stars X, Y and Z.



- (a) X is much hotter than Z yet X and Z have the same luminosity. Explain this observation. [2]
- (b) Calculate the ratio $\frac{R_Z}{R_Y}$ of the radius of Z to that of Y. [3]
- (c) Gravitational pressure tends to make stars contract. X and Y are both stable stars. State how X and of Y manage to oppose their gravitational pressures.
- (i) X [1]
- (ii) Y [1]

K.A. Tsokos

Q5 [5 marks]

Two parallel plates are oppositely charged. The potential difference between the plates is 240 V and their separation is 2.0 cm.



- (a) Draw the electric field lines for this arrangement. [2]
 (b) Calculate the electric field strength between the plates. [1]
 (c) A proton is placed on the positively charged plate and is then released. The experiment is repeated with the proton replaced by an alpha particle.

Calculate the ratio $\frac{v_p}{v_\alpha}$ of the speed of the proton to that of the alpha particle when the particles reach the negative plate. [2]

Q6 [20 marks]

- (a) A container of fixed volume holds 7.0 mol of helium (${}^4_2\text{He}$) at pressure 3.0×10^5 Pa and temperature 270 K. The volume of a helium atom is about 3×10^{-30} m³.

Calculate

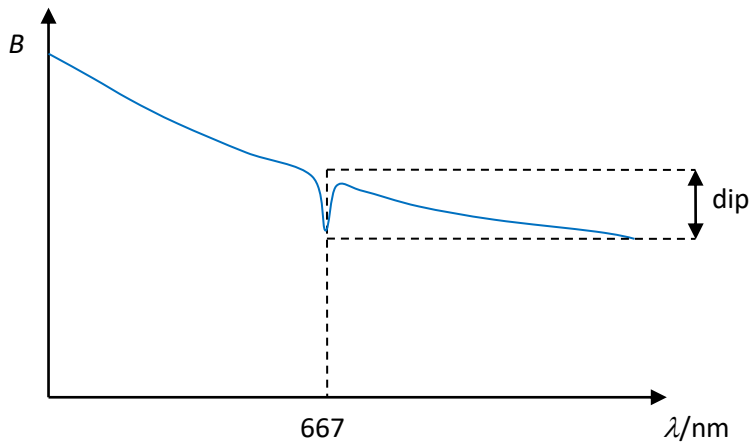
- (i) the total volume of the molecules in the container, [2]
 (ii) the volume of the container, [2]
 (iii) the total mass of the helium gas. [1]
- (b) State and explain, by reference to the kinetic model of gases, why it is reasonable to consider helium in this container to behave as an ideal gas. [2]

K.A. Tsokos

- (c) The gas in (a) is heated at constant volume from a pressure of 3.0×10^5 Pa and temperature 270 K to a pressure of 5.0×10^5 Pa. Calculate the new temperature of the gas. [2]
- (d) Draw a line on the P - V diagram to represent the change in (c). [1]



- (e)
- (i) Show that the change in the internal energy of helium is about 16 kJ. [1]
- (ii) Estimate the specific heat capacity of helium. [2]
- (f) The emission spectrum of helium contains photons of energy 1.86 eV. Show that the wavelength of these photons is 667 nm. [2]
- (g) The graph shows the variation of the intensity B of the black body radiation emitted by the Sun for wavelengths near 667 nm.



The curve shows a dip at a wavelength of 667 nm.

- (i) Outline what is meant by black body radiation. [2]
- (ii) Explain why the presence of the dip is evidence that the Sun contains helium. [3]

Markscheme

1			
a		The total momentum stays the same when no external forces act on the system ✓ The carts exert equal and opposite forces on each other so the net force is zero ✓	[2]
b		$6.0 \times 3.0 + 0 = (3.0 + 6.0) \times v \Rightarrow v = 2.0 \text{ ms}^{-1}$ ✓ Change in KE: $\frac{1}{2} \times 3.0 \times 6.0^2 - \frac{1}{2} \times 9.0 \times (2.0)^2 = 36 \text{ J}$ ✓	[2]

2			
a		A very small percentage of the incident alpha particles were scattered at very large scattering angles ✓ This required a huge electric force that could only be provided if the positive charge of the atom was concentrated in a very small, massive object ✓	[2]
b	i	${}_{94}^{239}\text{Pu} \rightarrow {}_{92}^{235}\text{U} + {}_2^4\alpha$ Correct numbers for U ✓	[2]
b	ii	$235 \times 7.5909 + 4 \times 7.0739 - 239 \times 7.5603$ ✓ 5.25 MeV ✓	[2]

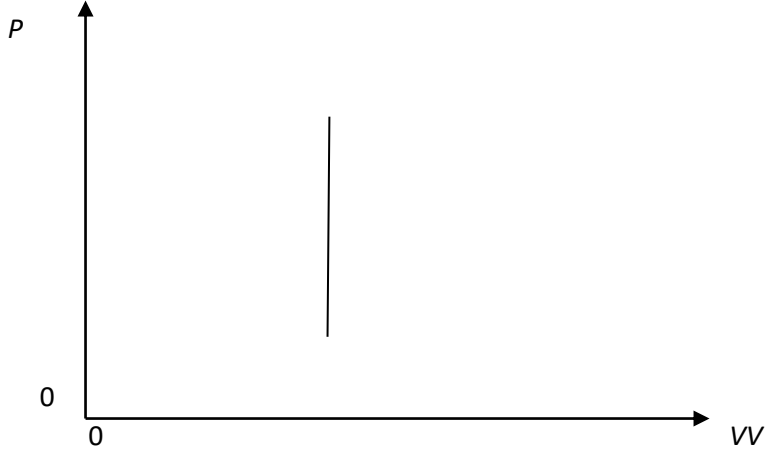
3			
a		In a transverse wave the displacement is at right angles to the direction of energy transfer ✓ In a longitudinal wave the displacement is parallel to the direction of energy transfer ✓	[2]
b	i	$\lambda = 0.30 \text{ m}$ ✓ $v = f\lambda = 250 \times 0.30 = 75 \text{ ms}^{-1}$ ✓	[2]

b	ii	<p>Correct shape ✓ Correct period ✓</p>		[2]
c	i			[1]
c	ii			[1]

4				
a		Luminosity also depends on area ✓ Star Z has a much larger area than X ✓		[2]
b	i	$\frac{L_Z}{L_Y} = \frac{4\pi\sigma R_Z^2 T_Z^4}{4\pi\sigma R_Y^2 T_Y^4} = 10^6 \checkmark$ $\frac{R_Z}{R_Y} = \sqrt{10^6 \times \frac{20000^4}{2500^4}} \checkmark$ $\frac{R_Z}{R_Y} = 6.4 \times 10^3 \checkmark$		[3]
c	i	X: by radiation pressure caused by fusion reactions ✓		[1]
c	ii	Y: by electron degeneracy pressure ✓		[1]

5				
a		Uniform lines from left to right in the interior ✓ Edge effects ✓		[2]

b		$E = \frac{V}{d} = \frac{240}{2.0 \times 10^{-2}} = 2.2 \times 10^4 \text{ NC}^{-1} \checkmark$	[1]
c		$qV = \frac{1}{2}mv^2 \Rightarrow v = \sqrt{\frac{2qV}{m}} \checkmark$ $\frac{v_p}{v_\alpha} = \sqrt{\frac{q_p m_\alpha}{q_\alpha m_p}} = \sqrt{\frac{1}{2} \times 4} = \sqrt{2} \checkmark$	[2]

6			
a	i	$N = 7.0 \times 6.02 \times 10^{23} = 4.2 \times 10^{24} \checkmark$ $4.2 \times 10^{24} \times 3.0 \times 10^{-30} = 1.3 \times 10^{-5} \text{ m}^3 \checkmark$	[2]
a	ii	$V = \frac{RnT}{P} \checkmark$ $V = \frac{8.31 \times 7.0 \times 270}{3.0 \times 10^5} = 5.2 \times 10^{-2} \text{ m}^3 \checkmark$	[2]
a	iii	$7 \times 4 = 28 \text{ g} \checkmark$	[1]
b		<p>One of the assumptions of the kinetic theory of gases states that the volume of the molecules is negligible compared to the volume of the gas \checkmark</p> <p>Here $\frac{V_{\text{molecules}}}{V_{\text{gas}}} = \frac{1.3 \times 10^{-5}}{5.2 \times 10^{-2}} = 2.5 \times 10^{-4}$ which is very small \checkmark</p>	[2]
c		$\frac{P_1}{T_1} = \frac{P_2}{T_2} \Rightarrow T_2 = T_1 \times \frac{P_2}{P_1} \checkmark$ $T_2 = 270 \times \frac{5.0}{3.0} = 450 \text{ K} \checkmark$	[2]
d		 <p>Vertical straight line \checkmark</p>	[1]

e	i	$\Delta U = \frac{3}{2} R n \Delta T = \frac{3}{2} \times 8.31 \times 7.0 \times (450 - 270) = 15706 \text{ J} \checkmark$	[1]
e	ii	Realization that $Q = \Delta U \checkmark$ $c = \frac{Q}{m \Delta T} = \frac{15705}{0.028 \times (450 - 270)} = 3.1 \times 10^3 \text{ J kg}^{-1} \text{ K}^{-1} \checkmark$	[2]
f		$E = \frac{hc}{\lambda} \Rightarrow \lambda = \frac{hc}{E} \checkmark$ $\lambda = \frac{1.24 \times 10^{-6}}{1.86} = 666.6 \approx 667 \text{ nm} \checkmark$	[2]
g	i	[2] max from Electromagnetic radiation with an infinite range of wavelengths \checkmark With a peak determined by temperature \checkmark Radiation emitted by a body at some finite kelvin temperature \checkmark Radiation with an intensity proportional to the 4 th power of the kelvin temperature \checkmark	[2] max
g	ii	Helium has energy levels separated by 1.86 eV \checkmark This energy difference is unique to helium \checkmark The dip implies that photons of this energy are absorbed \checkmark By helium	[3]